


Multi-Step Problem Solving



Name: _____ **Date:** _____

2-Step Word Problems

 Read the problem three times.  Highlight the important information.  Cross out the information that you don't need.

Read the problem: Billy was playing in his back yard. He found 22 bunnies in his garden. They were eating his carrots! He also found 17 birds up in his tree. They were making beautiful bird songs. After lunch, 13 birds had flown away. How many animals did Billy have left in his yard? 

Write your work:

Use a number line:

Write the answer:

24 word problems
With regrouping and without

ALL STUDENTS CAN *shine*

NO regrouping




{12 word problems}

3 addition & addition
3 addition & subtraction
3 subtraction & subtraction
3 subtraction & addition




Name: _____ Date: _____

2-Step Word Problems

 Read the problem three times.	 Highlight the important information.	 Cross out the information that you don't need.
---	--	--

Read the problem.

Gerry and Mike loved to hop on mushrooms in the forest. Their forest was filled with wonderful little mushrooms. There were 79 in all! Gerry hopped on 26 mushrooms and Mike hopped on 32 mushrooms. Jim wanted to play too. How many mushrooms were left for Jim to hop on?



Show your work.

$\underline{\quad} \bigcirc \underline{\quad} = \underline{\quad}$	$\underline{\quad} \bigcirc \underline{\quad} = \underline{\quad}$
--	--

Write a sentence.

.....
.....
.....

© All Students Can SHINE



Name: _____

Date: _____

2-Step Word Problems



Read the problem three times.




Highlight the important information.



Cross out the information that you don't need.

Read the problem.

Billy was playing in his back yard. He found 22 bunnies in his garden. They were eating his carrots! He also found 17 birds up in his tree. They were making beautiful bird songs. After lunch, 13 birds had flown away. How many animals did Billy have left in his yard?



Show your work.

___ ○ ___ = ___

___ ○ ___ = ___

Write a sentence.

Four sets of horizontal lines for writing a sentence, each set consisting of a solid top line, a dashed middle line, and a solid bottom line.

WITH regrouping


{12 word problems}


3 addition & addition
3 addition & subtraction
3 subtraction & subtraction
3 subtraction & addition




Name: _____ Date: _____

2-Step Word Problems


 Read the problem three times.

 Highlight the important information.

 Cross out the information that you don't need.

Read the problem.

King Krab's castle was majestic. It had 42 flags on it. One rainy day, the strong winds blew 28 flags away. King Krab was so sad that he cried for 14 days! Prince Prim decided to surprise him with 58 new flags for his castle. How many flags did King Krab's castle have now?



Show your work.

Write a sentence.

© All Students Can SHINE

Name: _____

Date: _____

2-Step Word Problems



Read the problem three times.




Highlight the important information.



Cross out the information that you don't need.

Read the problem.

Hopper the frog was catching flies for his dinner. He saw 32 flies in the first pond and 18 flies in the second pond. He got to work to catch all the flies he could. Hopper caught 35 flies and ate them. Yum! Yum! How many flies were left for him to eat?



Show your work.

○

○

Write a sentence.

.....

.....

WEEKLY NEWSLETTER

Grab a cup of coffee and take a few minutes with **our weekly newsletter** created just for teachers like you.

SIGN ME UP



ABOUT ALL STUDENTS CAN SHINE

All Students Can Shine is part of the Lucky Little Learners family of elementary education resource design companies created by teachers, for teachers. We provide the highest quality instructional and supplemental resources to empower a better everyday life for K-2nd grade teachers.



BETTER TOGETHER

All Students Can Shine and Lucky Little Learners have joined forces to better serve K-2 teachers.