


Name: _____

Math Word Problems

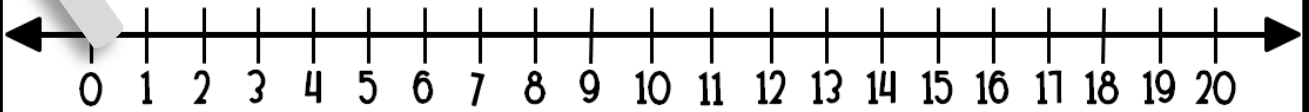
Read the problem.

Ben picked 8 apples.
Mel picked 5 apples.
How many apples did they pick in all?

Draw a picture to show your work.



Draw your hops.



Write an equation.

$$\square \bigcirc \square = \square$$

Write your answer.

apples


Name: _____

Math Word Problems

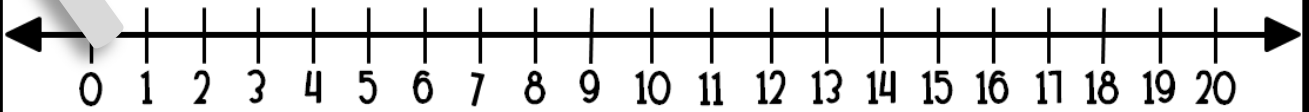
Read the problem.

Pat saw 6 rainy clouds in the morning.
He saw 7 rainy clouds in the afternoon.
How many clouds did he see in all?

Draw a picture to show your work.



Draw your hops.



Write an equation.

$$\square \bigcirc \square = \square$$

Write your answer.

clouds

Name: _____

Math Word Problems

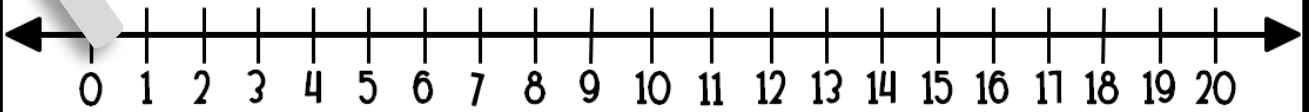
Read the problem.

Max caught 12 butterflies.
He put them in a jar. Then he caught 3 more.
How many butterflies were there in all?

Draw a picture to show your work.



Draw your hops.



Write an equation.

$$\square \bigcirc \square = \square$$

Write your answer.

butterflies

WEEKLY NEWSLETTER

Grab a cup of coffee and take a few minutes with **our weekly newsletter** created just for teachers like you.

SIGN ME UP



ABOUT ALL STUDENTS CAN SHINE

All Students Can Shine is part of the Lucky Little Learners family of elementary education resource design companies created by teachers, for teachers. We provide the highest quality instructional and supplemental resources to empower a better everyday life for K-2nd grade teachers.



BETTER TOGETHER

All Students Can Shine and Lucky Little Learners have joined forces to better serve K-2 teachers.